




Make 10 with Gold Coins (6-10)

Draw more coins in each ten frame to make 10, then complete the equation.

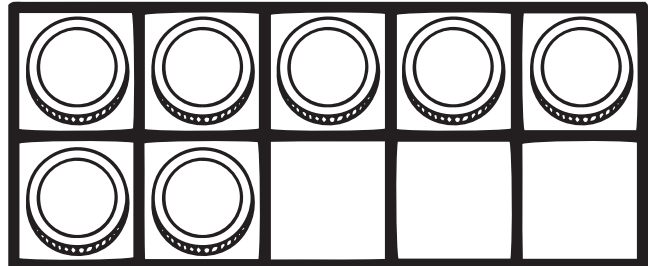
Add more ____ coins to make 10

$$6 + \underline{\quad} = 10$$




Add more ____ coins to make 10

$$7 + \underline{\quad} = 10$$




Add more ____ coins to make 10

$$8 + \underline{\quad} = 10$$



Add more ____ coins to make 10

$$9 + \underline{\quad} = 10$$



Add more ____ coins to make 10

$$10 + \underline{\quad} = 10$$

