




Make 10 with Gold Coins (1-5)

Draw more coins in each ten frame to make 10, then complete the equation.


Add more ____ coins to make 10

$$1 + \underline{\quad} = 10$$




Add more ____ coins to make 10

$$2 + \underline{\quad} = 10$$




Add more ____ coins to make 10

$$3 + \underline{\quad} = 10$$



Add more ____ coins to make 10

$$4 + \underline{\quad} = 10$$



Add more ____ coins to make 10

$$5 + \underline{\quad} = 10$$

