




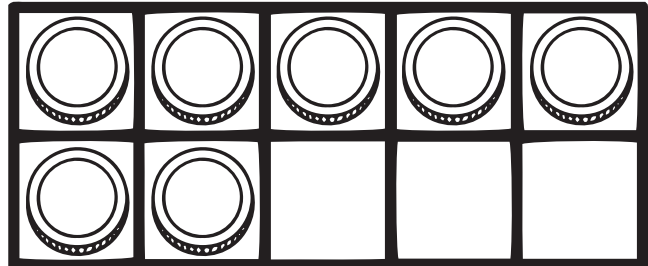
Number Bonds to 10 (6-10)

Count the coins and spaces, then complete the number bond and equation.


Coins: _____ Spaces: _____
_____ + _____ = 10




Coins: _____ Spaces: _____
_____ + _____ = 10



Coins: _____ Spaces: _____
_____ + _____ = 10



Coins: _____ Spaces: _____
_____ + _____ = 10



Coins: _____ Spaces: _____
_____ + _____ = 10

