




Subtraction from 10 With Shamrocks

Cross out the shamrocks, then complete the equation.


Cross out 1 shamrock

$10 - 1 = \underline{\quad}$




Cross out 2 shamrocks

$10 - 2 = \underline{\quad}$




Cross out 3 shamrocks

$10 - 3 = \underline{\quad}$



Cross out 4 shamrocks

$10 - 4 = \underline{\quad}$



Cross out 5 shamrocks

$10 - 5 = \underline{\quad}$

