




Subtraction with Shamrocks

Count the shamrocks, cross out the number shown, then complete the equation.


Cross out 2 shamrocks

$7 - 2 = \underline{\quad}$




Cross out 3 shamrocks

$9 - 3 = \underline{\quad}$




Cross out 4 shamrocks

$6 - 4 = \underline{\quad}$



Cross out 5 shamrocks

$8 - 5 = \underline{\quad}$



Cross out 1 shamrock

$5 - 1 = \underline{\quad}$

